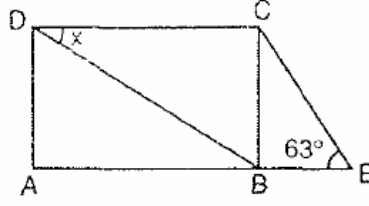


UNUTMA!

kısa kısa

DİKDÖRTGEN 2

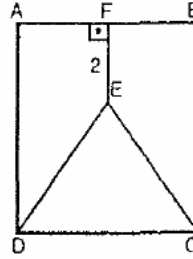
örnek1.



Şekildeki ABCD dikdörtgeninde,
 $|DB| = |AE|$ ve $m(\widehat{AEC}) = 63^\circ$ ise,
 $m(\widehat{BDC}) = x$ kaç derecedir?

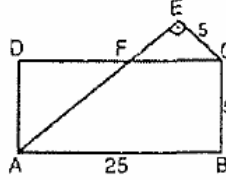
örnek2.

ABCD dikdörtgen,
DEC eşkenar
üçgen,
 $[EF] \perp [AB]$,
 $|EF| = 2$ cm,
 $|CD| = 6$ cm ise
Alan (ABCD)
kaç cm^2 dir?



örnek3.

ABCD
dikdörtgen,
 $[EC] \perp [AE]$,
 $|EC| = |CB| = 5$ cm,
 $|AB| = 25$ cm,
ise $|AF|$ kaç cm dir?



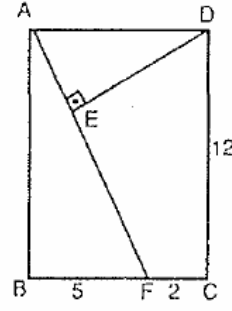
matematiX.com

kalemın oynasın...

UNUTMA!
örnek4.

kısa kısa

ABCD
dikdörtgen,
[AF] \perp [DE],
|BF| = 5 cm,
|FC| = 2 cm,
|CD| = 12 cm
ise |DE|

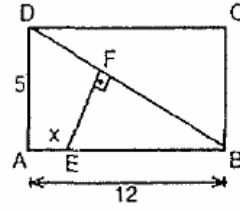


kaç cm dir?

- A) $\frac{60}{13}$ B) 6 C) $\frac{84}{13}$ D) 8 E) 11

örnek5.

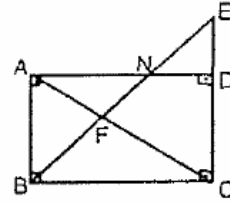
Şekilde ABCD
dikdörtgeni,
[EF] \perp [DB],
|AB| = 12 cm,
|AD| = 5 cm ve
|EF| = $\frac{50}{13}$ cm



ise. |AE|= x kaç cm dir?

örnek6.

Şekildeki ABCD
dikdörtgeninde
5. |AF| = 2 |AC| ,
|BN| = 10 cm ise,
|FE| kaç cm dir?



matematiX.com

kalemın oynasın...